

PRONTI PER INIZIARE?

PRIMA DI PARTIRE DIAMO INSIEME UN'OCCHIATA AL VIDEO CHE LE MAESTRE VI HANNO PREPARATO, LO TROVATE QUI:


https://www.powtoon.com/online-presentation/cV8B7ZyYvBQ/addizione/?utm_source=broadcast&utm_medium=email&utm_campaign=Transactional-Publish-success&mode=movie

E ADESSO POSSIAMO INIZIARE!
DIVERTITI A CONTARE E AIUTA NUOVI AMICI ALLE PRESE
CON PICCOLI PROBLEMI DA RISOLVERE INSIEME!



ADDIZIONI ENTRO IL 10


● USA LE CANNUCCE, COMPLETA I BLOCCHI E SCOPRI IL RISULTATO. SEGUI L'ESEMPIO.




$$\boxed{5} + \boxed{2} = \boxed{7}$$



$$\boxed{} + \boxed{} + \boxed{} = \boxed{}$$



$$\boxed{} + \boxed{} = \boxed{}$$

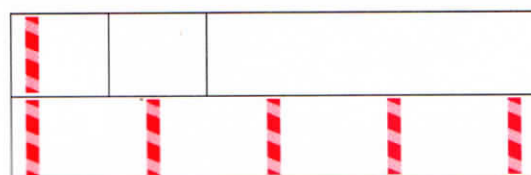


$$\boxed{} + \boxed{} + \boxed{} = \boxed{}$$

● DISEGNA LE CANNUCCE NEI BLOCCHI. FAI ATTENZIONE: IL RISULTATO C'È GIÀ!




$$\boxed{4} + \boxed{} = \boxed{8}$$



$$\boxed{1} + \boxed{} + \boxed{} = \boxed{5}$$









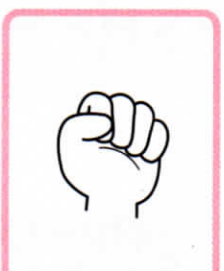

$$\boxed{} + \boxed{} = \boxed{10}$$




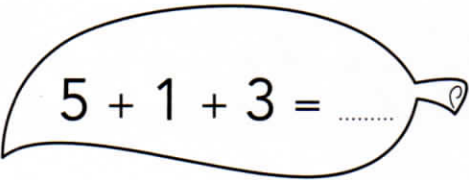
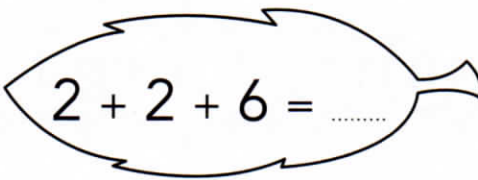
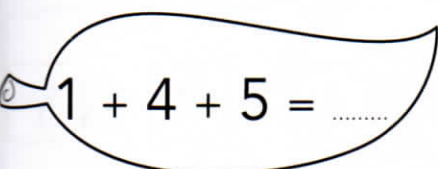

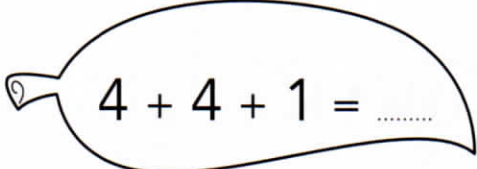
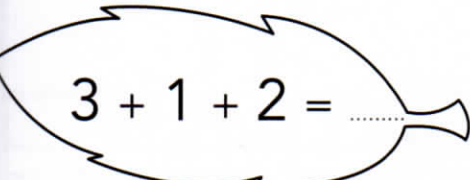
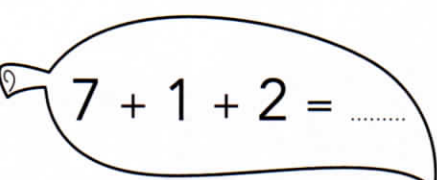


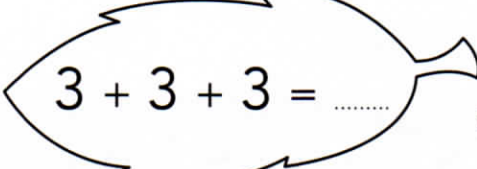
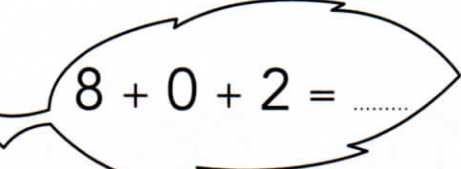
$$\boxed{} + \boxed{} + \boxed{} = \boxed{7}$$

ADDIZIONI CON LE MANI

● GUARDA LE MANI E SCOPRI IL RISULTATO.








	+		=	<input type="text"/>			+		=	<input type="text"/>
	+		=	<input type="text"/>			+		=	<input type="text"/>

● USA LE MANI O LE CANNUCCE E CALCOLA VELOCEMENTE.

		
$4 + 3 + 1 = \dots$	$5 + 1 + 3 = \dots$	$2 + 2 + 6 = \dots$
		
$1 + 4 + 5 = \dots$	$6 + 0 + 3 = \dots$	$4 + 4 + 1 = \dots$
		
$3 + 1 + 2 = \dots$	$7 + 1 + 2 = \dots$	$5 + 0 + 3 = \dots$
		
$6 + 1 + 0 = \dots$	$3 + 3 + 3 = \dots$	$8 + 0 + 2 = \dots$

ADDIZIONI SULLA LINEA

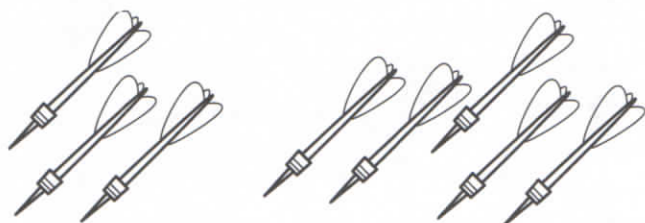
● USA LA LINEA DEI NUMERI, CALCOLA E COMPLETA.



PROBLEMI CON L'ADDIZIONE / 1

1 LEGGI, COMPLETA CON I NUMERI E RISPONDI.

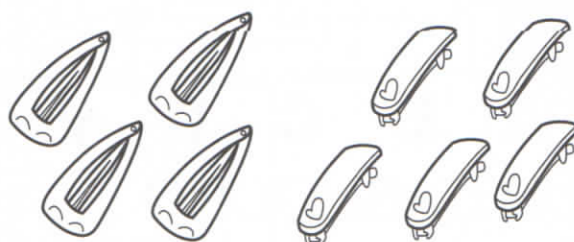
LUCA FA **3** PUNTI E POI **5** PUNTI A FRECCETTE.
QUANTI PUNTI FA
IN TUTTO LUCA?



..... + =

LUCA FA PUNTI
IN TUTTO.

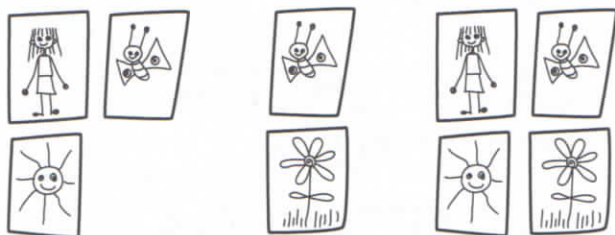
ANNA HA **4** MOLLETTE
ROSA E **5** BLU.
QUANTE MOLLETTE
HA **IN TOTALE** ANNA?



..... + =

ANNA HA **IN TOTALE**
..... MOLLETTE.

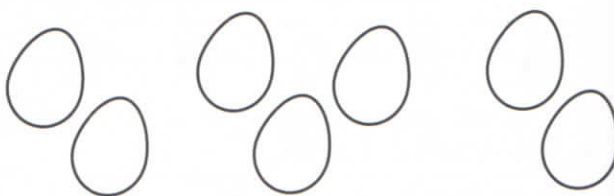
ISA COLORA **3** DISEGNI,
POI **2** E INFINE ALTRI **4**.
QUANTI DISEGNI **IN**
TUTTO COLORA ISA?



..... + + =

ISA COLORA **IN TUTTO**
..... DISEGNI.

IVO COMPRA **2** UOVA,
POI ALTRE **3** E QUINDI **2**.
QUANTE UOVA COMPRA
IN TOTALE IVO?



..... + + =

IVO COMPRA **IN TOTALE**
..... UOVA.