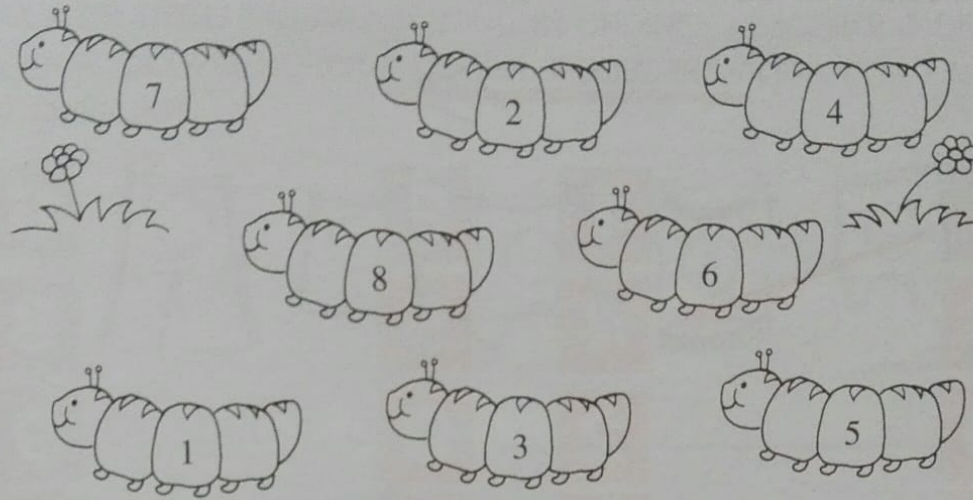
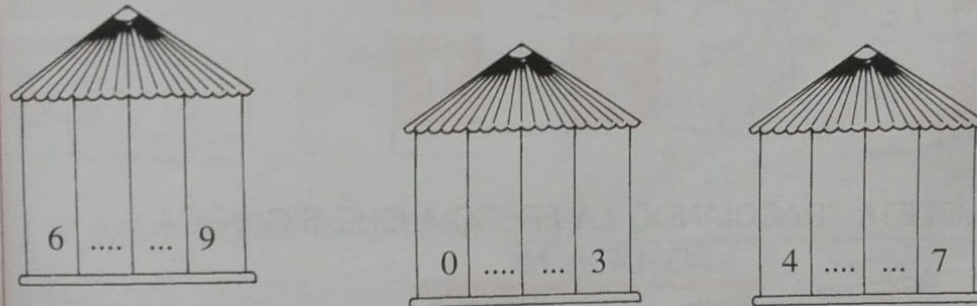


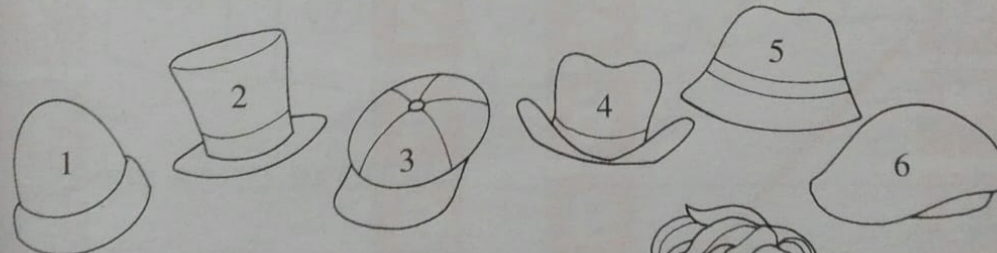
SCRIVI IL NUMERO PRECEDENTE E IL SEGUENTE.



SCRIVI I NUMERI COMPRESI TRA QUELLI SCRITTI.



SEGUI GLI INDIZI E SCOPRI IL CAPPELLO DI ZIO LUIGI.



IL CAPPELLO HA UN NUMERO:



- COMPRESO FRA 2 E 6
- MAGGIORE DI 3
- IL MINORE TRA I DUE.



RISCRIVI OGNI SERIE DI NUMERI NELL'ORDINE INDICATO E SCOPRI IL NOME DELL'OGGETTO CHE DOVRAI DISEGNARE.

DECRESCENTE

G	R	A	F	O	L	A
5	9	0	10	2	1	6




CRESCENTE

L	O	B	A	R	E
3	9	5	0	8	7


DECRESCENTE

D	A	N	E	C	L	A
6	9	8	4	10	2	1

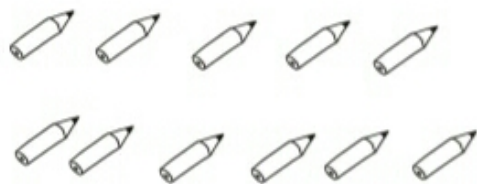


CRESCENTE

T	O	B	A	E	U	M	O	L	I
2	5	6	0	10	1	4	3	9	7




■ RAGGRUPPA PER 10 E COMPLETA.




DA	U

UNDICI



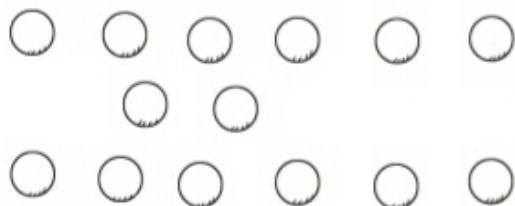
DA	U
	2

\_\_\_\_\_



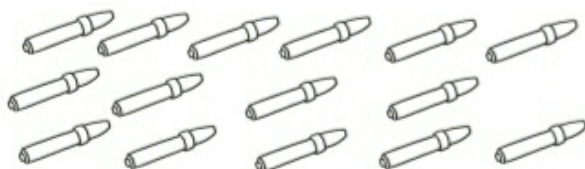
DA	U

TREDICI



DA	U
1	

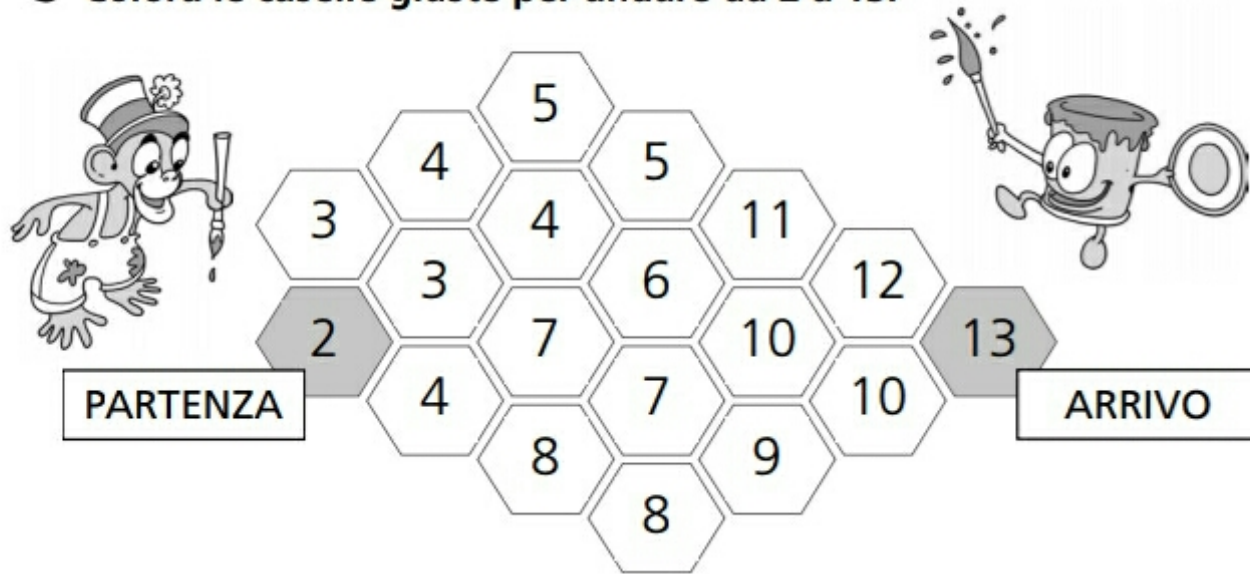
\_\_\_\_\_



DA	U
1	

\_\_\_\_\_

© Colora le caselle giuste per andare da 2 a 13.



© Colora le caselle giuste per andare da 3 a 15.



■ COLORA LE PALLINE ED ESEGUI LE ADDIZIONI.

$7 + 2 \rightarrow$  \_\_\_\_\_ 

$4 + 2 \rightarrow$  \_\_\_\_\_ 

$5 + 4 \rightarrow$  \_\_\_\_\_ 

$3 + 3 \rightarrow$  \_\_\_\_\_ 

$8 + 4 \rightarrow$  \_\_\_\_\_ 

$7 + 7 \rightarrow$  \_\_\_\_\_ 

$7 + 6 \rightarrow$  \_\_\_\_\_ 

$8 + 6 \rightarrow$  \_\_\_\_\_ 

$9 + 3 \rightarrow$  \_\_\_\_\_ 

$9 + 5 \rightarrow$  \_\_\_\_\_ 