



FINALI DIVERSI

- FORMULA DOMANDE APPROPRIATE AIUTANDOTI CON LE PAROLE SCRITTE SULLE FRECCHE.

In un prato ci sono 12 formiche.





Dopo un po' arrivano 7 ragni.



IN TUTTO

DIFFERENZA



DOMANDA

.....
.....

OPERAZIONE

$$\boxed{\dots\dots} \dots \boxed{\dots\dots} = \boxed{\dots\dots}$$

RISPOSTA

.....
.....

DOMANDA

.....
.....

OPERAZIONE

$$\boxed{\dots\dots} \dots \boxed{\dots\dots} = \boxed{\dots\dots}$$

RISPOSTA

.....
.....