


OSSERVA I SEGUENTI SCHIERAMENTI E SCRIVI VICINO AD OGNUNO UNA MOLTIPLICAZIONE E UNA DIVISIONE A LORO CORRISPONDENTI:


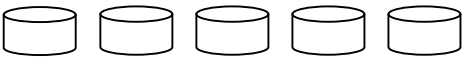







$3 \times 5 = 15$  oppure  $5 \times 3 = 15$



$15 : 5 = 3$  oppure  $15 : 3 = 5$



<p>X X X X .....            X X X X            X X X X .....            X X X X            X X X X            X X X X            X X X X</p>	<p>              .....            .....</p>	<p>O O O O            O O O O            O O O O .....            O O O O            O O O O            O O O O .....            O O O O            O O O O</p>
<p>X            X            X .....            X            X            X .....            X            X            X            X</p>	<p>              .....            .....</p>	<p>X X X X X X X            X X X X X X X            X X X X X X X            X X X X X X X            X X X X X X X            X X X X X X X            .....            .....</p>
<p>O O O O O O            O O O O O O            O O O O O O            O O O O O O            .....            .....</p>	<p>D D D D D            D D D D D .....            D D D D D            D D D D D .....            D D D D D</p>	<p>X X X .....            X X X            X X X .....            X X X            X X X            X X X            X X X</p>
<p>X X            X X            X X .....            X X            X X            X X .....            X X            X X            X X</p>	<p>S S S S            S S S S .....            S S S S            S S S S .....            S S S S</p>	<p>                .....            .....</p>

