

ARRIVIAMO A 100

NUMERA PER 10 DA 0 A 100.

0 – 10 – ...

SCRIVI IL NUMERO CHE MANCA PER ARRIVARE A 100.

$90 + \dots = 100$

$70 + \dots = 100$

$80 + \dots = 100$

$40 + \dots = 100$

$30 + \dots = 100$

$20 + \dots = 100$


$50 + \dots = 100$

$60 + \dots = 100$

$0 + \dots = 100$

$10 + \dots = 100$

OSSERVA LE RAPPRESENTAZIONI, SCRIVI SUL QUADERNO LE OPERAZIONI E COMPLETA.




$91 + \dots = 100$




$92 + \dots = 100$



$93 + \dots = 100$




$94 + \dots = 100$



$95 + \dots = 100$



$96 + \dots = 100$



$97 + \dots = 100$



$98 + \dots = 100$



$99 + \dots = 100$

COMPLETA FORMANDO SEMPRE 100.

