

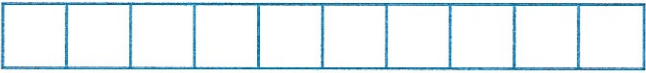

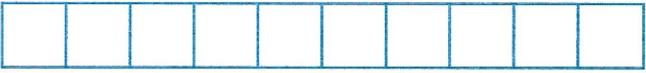
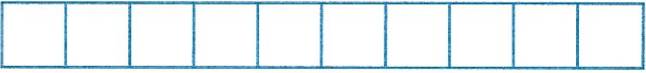






# Le frazioni decimali e i numeri decimali

1 Colora le frazioni e completa la tabella, come nell'esempio.

Frazione			Numero decimale
$\frac{1}{10}$		1 decimo	0,1
$\frac{2}{10}$		..... decimi	.....
$\frac{3}{10}$		..... decimi	.....
$\frac{4}{10}$		..... decimi	.....
$\frac{5}{10}$		..... decimi	.....
$\frac{6}{10}$		..... decimi	.....
$\frac{7}{10}$		..... decimi	.....
$\frac{8}{10}$		..... decimi	.....
$\frac{9}{10}$		..... decimi	.....
$\frac{10}{10}$		..... decimi	.....

2 Collega ogni numero al suo posto.

